

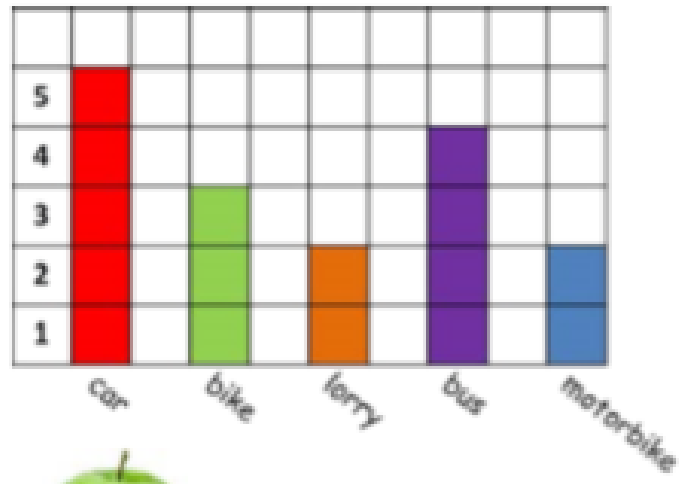
Week 6

Day 1

How many sentence can you make up about this graph?

Make sure you have used all of these words and phrases:

altogether, equal to, more than, less than, fewer than, most popular, most common, least popular, least common



Day 2

Make the block graph to match these clues:

1. There are two more bananas than apples.
2. There are four oranges.
3. Oranges are the least popular fruit.
4. The number of apples is double the number of oranges.
5. The difference between the number of oranges and the number of plums is three.

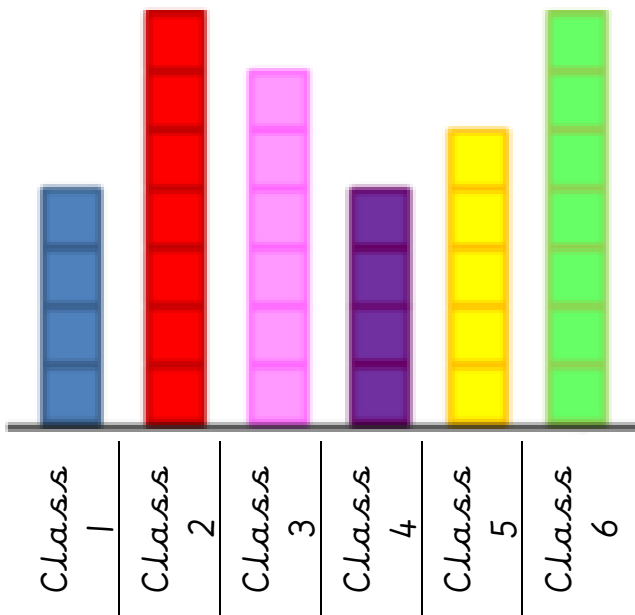


*Number
of fruit*

*Don't forget
to label the
block graph*

Names of fruit

Day 3



1, This graph shows how many times each class has won the weekly attendance certificate.

2, Which class has won it the most?

3, How many times has Class 5 won it?


4, How many more times has Class 2 won it than Class 4?

5, If there are eight more weeks of the year left, how could the totals for each class change?


Number Bond Sticks

Can you complete these number sentences using number bonds to 20?


The first one has been done for you.




$$\boxed{19} + \boxed{1} = 20$$




$$\boxed{} + \boxed{} = 20$$




$$\boxed{} + \boxed{} = 20$$




$$\boxed{} + \boxed{} = 20$$




$$\boxed{} + \boxed{} = 20$$



$$\boxed{} + \boxed{} = 20$$









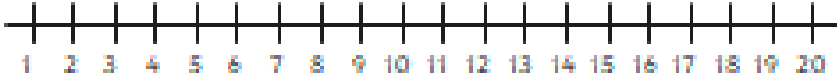


$$\boxed{} + \boxed{} = 20$$



$$\boxed{} + \boxed{} = 20$$

SUBTRACTION NUMBER LINE

$20 - 17 =$	
$12 - 4 =$	
$18 - 12 =$	
$10 - 3 =$	
$17 - 5 =$	
$12 - 2 =$	
$3 - 2 =$	
$20 - 8 =$	
$15 - 3 =$	
$19 - 11 =$	